

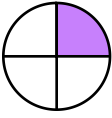
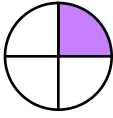
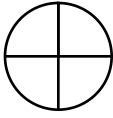
Name : _____

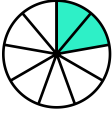
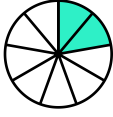
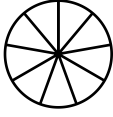
Score : _____

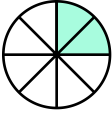
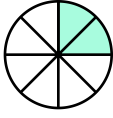
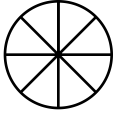
Teacher : _____




Date : _____

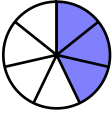
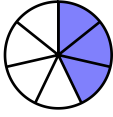
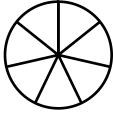
Visually Adding Simple Fractions

1)  +  = 
 $\frac{1}{4} + \frac{1}{4} =$ _____

2)  +  = 
 $\frac{2}{9} + \frac{2}{9} =$ _____

3)  +  = 
 $\frac{2}{8} + \frac{2}{8} =$ _____

4)  +  = 
 $\frac{1}{3} + \frac{1}{3} =$ _____

5)  +  = 
 $\frac{3}{7} + \frac{3}{7} =$ _____

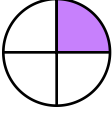
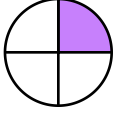
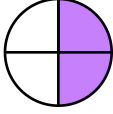
Name : _____

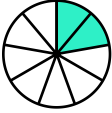

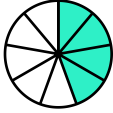
Score : _____

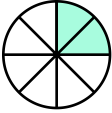
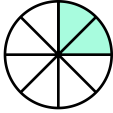
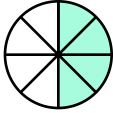
Teacher : _____




Date : _____

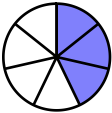
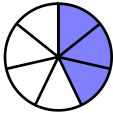
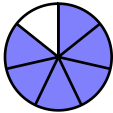
Visually Adding Simple Fractions

1)  +  = 
$$\frac{1}{4} + \frac{1}{4} = \frac{2}{4}$$

2)  +  = 
$$\frac{2}{9} + \frac{2}{9} = \frac{4}{9}$$

3)  +  = 
$$\frac{2}{8} + \frac{2}{8} = \frac{4}{8}$$

4)  +  = 
$$\frac{1}{3} + \frac{1}{3} = \frac{2}{3}$$

5)  +  = 
$$\frac{3}{7} + \frac{3}{7} = \frac{6}{7}$$